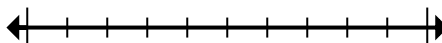




Mark the location (approximate) on the numberline and then solve.

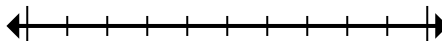
Answers

1) Round 14,905 to the nearest hundred.



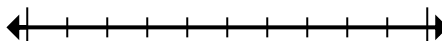
1. \_\_\_\_\_

2) Round 680,180 to the nearest hundred thousand.



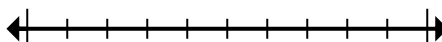
2. \_\_\_\_\_

3) Round 992,162 to the nearest hundred thousand.



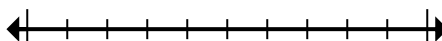
3. \_\_\_\_\_

4) Round 48,422,834 to the nearest hundred thousand.



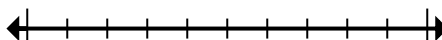
4. \_\_\_\_\_

5) Round 729,327 to the nearest thousand.



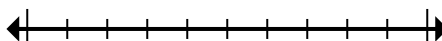
5. \_\_\_\_\_

6) Round 42,660 to the nearest thousand.



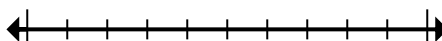
6. \_\_\_\_\_

7) Round 72,083,942 to the nearest hundred thousand.



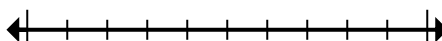
7. \_\_\_\_\_

8) Round 361 to the nearest hundred.



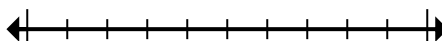
8. \_\_\_\_\_

9) Round 79,043 to the nearest ten thousand.



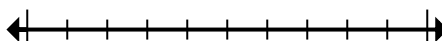
9. \_\_\_\_\_

10) Round 344 to the nearest hundred.



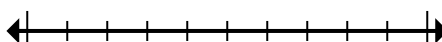
10. \_\_\_\_\_

11) Round 1,179 to the nearest thousand.



11. \_\_\_\_\_

12) Round 359,639 to the nearest hundred.



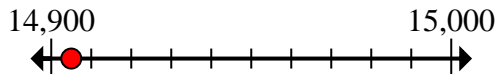
12. \_\_\_\_\_



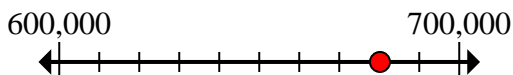
Mark the location (approximate) on the numberline and then solve.

Answers

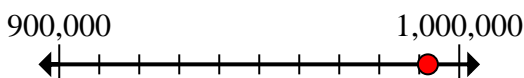
- 1) Round 14,905 to the nearest hundred.

1. 14,900

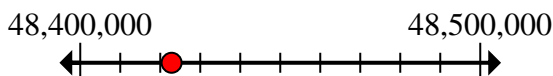
- 2) Round 680,180 to the nearest hundred thousand.

2. 700,000

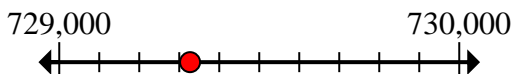
- 3) Round 992,162 to the nearest hundred thousand.

3. 1,000,000

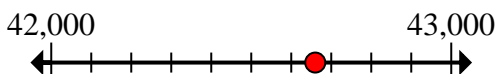
- 4) Round 48,422,834 to the nearest hundred thousand.

4. 48,400,000

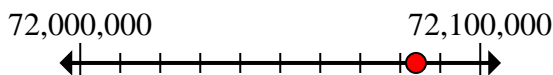
- 5) Round 729,327 to the nearest thousand.

5. 729,000

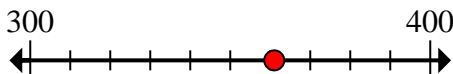
- 6) Round 42,660 to the nearest thousand.

6. 43,000

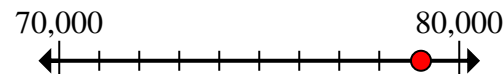
- 7) Round 72,083,942 to the nearest hundred thousand.

7. 72,100,000

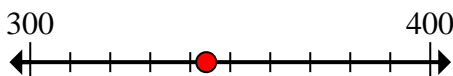
- 8) Round 361 to the nearest hundred.

8. 400

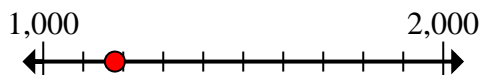
- 9) Round 79,043 to the nearest ten thousand.

9. 80,000

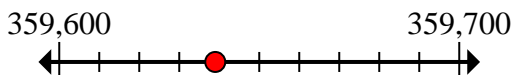
- 10) Round 344 to the nearest hundred.

10. 300

- 11) Round 1,179 to the nearest thousand.

11. 1,000

- 12) Round 359,639 to the nearest hundred.

12. 359,600

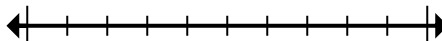


Mark the location (approximate) on the numberline and then solve.

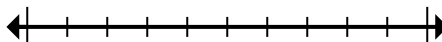
**Answers**

1,000	1,000,000	43,000	700,000
729,000	72,100,000	359,600	300
14,900	48,400,000	400	80,000

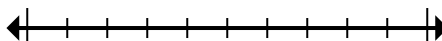
1) Round 14,905 to the nearest hundred.



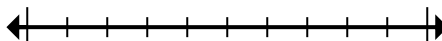
2) Round 680,180 to the nearest hundred thousand.



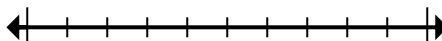
3) Round 992,162 to the nearest hundred thousand.



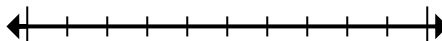
4) Round 48,422,834 to the nearest hundred thousand.



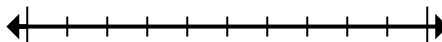
5) Round 729,327 to the nearest thousand.



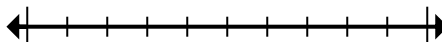
6) Round 42,660 to the nearest thousand.



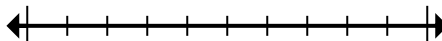
7) Round 72,083,942 to the nearest hundred thousand.



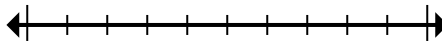
8) Round 361 to the nearest hundred.



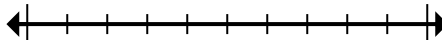
9) Round 79,043 to the nearest ten thousand.



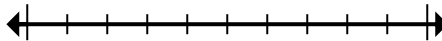
10) Round 344 to the nearest hundred.



11) Round 1,179 to the nearest thousand.



12) Round 359,639 to the nearest hundred.



1. \_\_\_\_\_
2. \_\_\_\_\_
3. \_\_\_\_\_
4. \_\_\_\_\_
5. \_\_\_\_\_
6. \_\_\_\_\_
7. \_\_\_\_\_
8. \_\_\_\_\_
9. \_\_\_\_\_
10. \_\_\_\_\_
11. \_\_\_\_\_
12. \_\_\_\_\_